









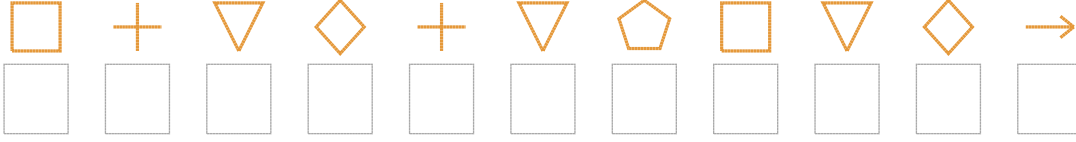


Şekil Sayı Eşleştirme

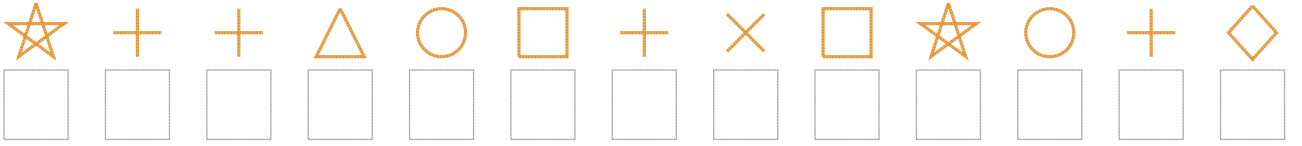
									
= 9	= 4	= 0	= 1	= 6	= 5	= 3	= 8	= 7	= 2

Aşağıdaki uzun şifreleri hatasız çözerek altlarına yazın:

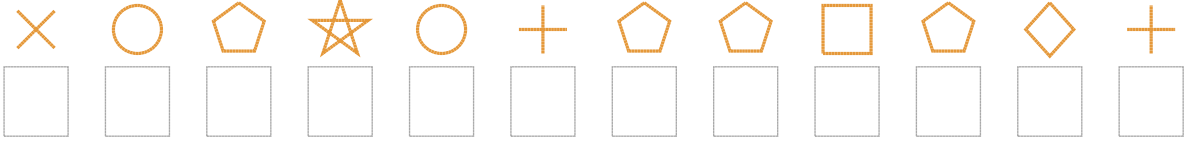
1. Şifre



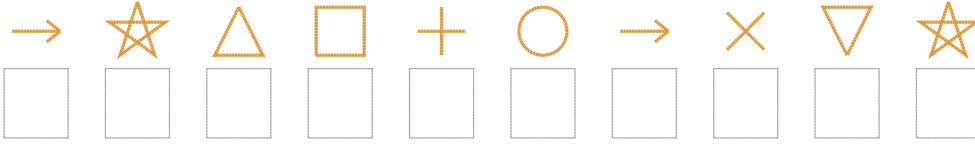
2. Şifre



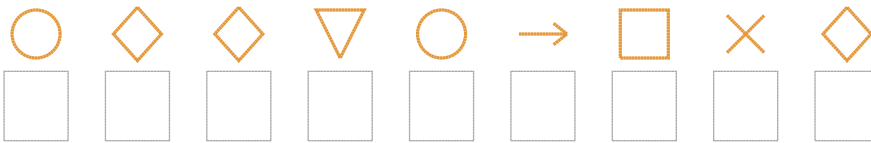
3. Şifre



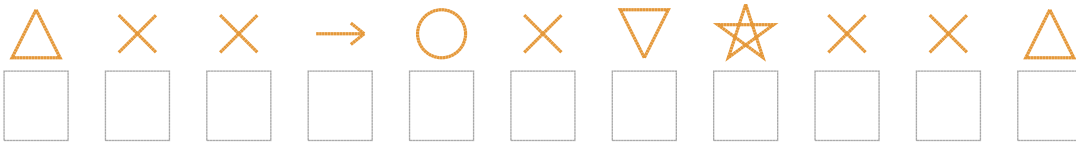
4. Şifre



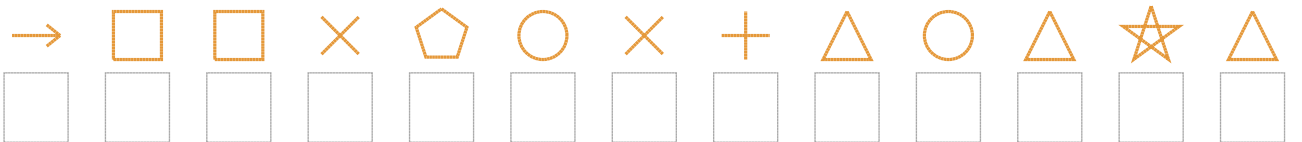
5. Şifre



6. Şifre



7. Şifre



❑ BONUS: 7. ve 2. şifrenin ikinci rakamının toplamı kaçtır?

Cevap Anahtarı

1. Şifre: 10870821876
2. Şifre: 9004310519307
3. Şifre: 532930221270
4. Şifre: 6941036589
5. Şifre: 377836157
6. Şifre: 45563589554
7. Şifre: 6115235043494

□ Bonus Soru Cevabı: 1